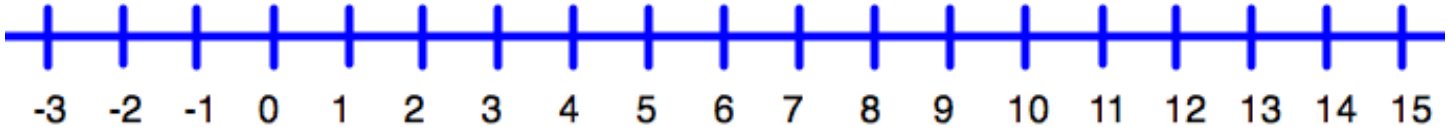




## Number Sentence



Sam had \$3.00. He earned \$4.00 and then spent \$5.00.

The number sentence would look like this  $(3+4)-5=2$

To draw this on the number line; you start at 3 go to 7 and then and arrow back to 2. Draw this on the number line.



Sue had \$5.00. She earned \$6.00 and then spent \$7.00.

Write the number sentence \_\_\_\_\_

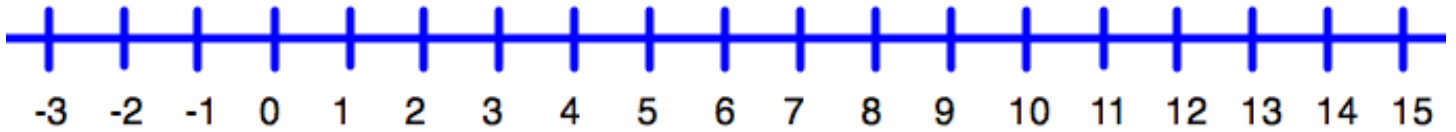
Draw this on the number line.



Jim had \$2.00. He earned \$10.00 and then spent \$4.00.

Write the number sentence \_\_\_\_\_

Draw this on the number line.



Joe had \$13.00. He earned \$2.00 and then spent \$6.00.

Write the number sentence \_\_\_\_\_

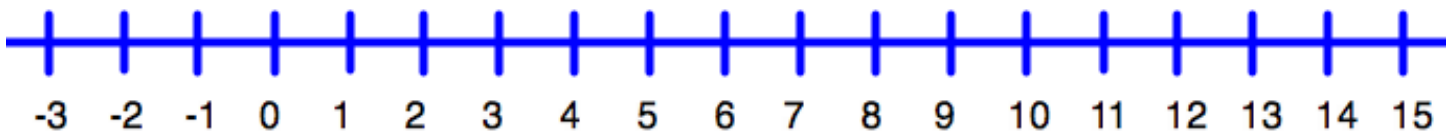
Draw this on the number line.



Peg had \$8.00. She lost \$6.00 and then spent \$1.00.

Write the number sentence \_\_\_\_\_

Draw this on the number line.



Al had \$14.00. He lost \$7.00 and then earned \$5.00.

Write the number sentence \_\_\_\_\_

Draw this on the number line.

Write your own number stories and sentences. See how creative you can be!